



**GCE AS/A level**

0980/01

**MATHEMATICS – M1**  
**Mechanics**

P.M. FRIDAY, 24 January 2014

1 hour 30 minutes

### **ADDITIONAL MATERIALS**

In addition to this examination paper, you will need:

- a 12 page answer book;
- a Formula Booklet;
- a calculator.

### **INSTRUCTIONS TO CANDIDATES**

Use black ink or black ball-point pen.

Answer **all** questions.

Take  $g$  as  $9.8 \text{ ms}^{-2}$ .

Sufficient working must be shown to demonstrate the **mathematical** method employed.

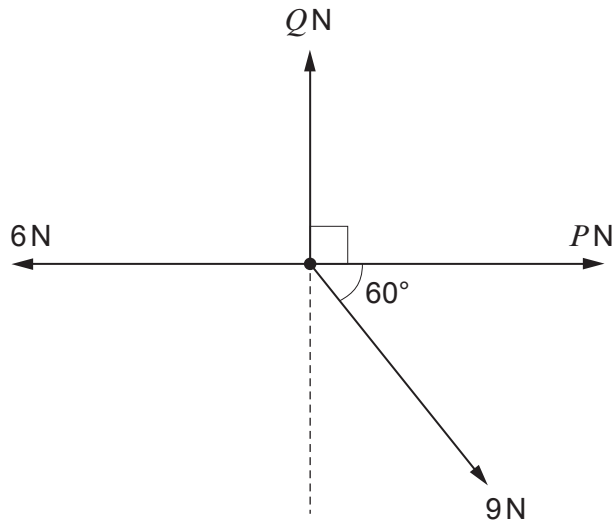
### **INFORMATION FOR CANDIDATES**

The number of marks is given in brackets at the end of each question or part-question.

You are reminded of the necessity for good English and orderly presentation in your answers.

1. A vehicle travels on a straight horizontal road. As it passes a point  $A$  at time  $t = 0$ , it is moving with a constant velocity of  $18 \text{ ms}^{-1}$ . It continues travelling at this velocity for 48 seconds. It then decelerates at a constant rate for the next 12 s until it passes a point  $B$  with velocity  $3 \text{ ms}^{-1}$ .
- (a) Sketch a velocity-time graph for the motion of the vehicle between  $A$  and  $B$ . [2]
- (b) Find the magnitude of the deceleration of the vehicle. [2]
- (c) Determine the distance between  $A$  and  $B$ . [3]
2. A pebble is projected vertically upwards with a speed of  $7 \text{ ms}^{-1}$  from the top of a cliff. It hits the ground at the bottom of the cliff 4 seconds later.
- (a) Calculate the time for the pebble to reach its maximum height. [3]
- (b) Determine the height of the cliff. [3]
3. A man of mass  $65 \text{ kg}$  stands in a lift which is ascending with acceleration  $1.2 \text{ ms}^{-2}$ . Find the magnitude of the reaction of the floor of the lift on the man. [3]
4. An object of mass  $60 \text{ kg}$  lies on a rough plane inclined at an angle of  $25^\circ$  to the horizontal. The coefficient of friction between the plane and the object is denoted by  $\mu$ . Initially, the object is held at rest. It is then released.
- (a) When  $\mu = 0.3$ , the object slides down the plane. Calculate
- (i) the magnitude of the frictional force,
- (ii) the acceleration of the object. [5]
- (b) Given that when the object is released it remains stationary, calculate the least possible value of  $\mu$ . [3]


5. Four horizontal forces of magnitude 6 N, 9 N,  $P$  N and  $Q$  N acting at a point are in equilibrium. Directions are as shown in the diagram.



Find the value of  $P$  and the value of  $Q$ .

[5]

6. The diagram below shows a car of mass 1500 kg connected to a trailer of mass 600 kg by means of a rigid tow bar. The car is moving upwards along a slope inclined at an angle  $\alpha$  to the horizontal, where  $\sin \alpha = \frac{7}{25}$ . A constant resistance of magnitude 400 N acts on the car and a constant resistance of 300 N acts on the trailer. The car's engine produces a constant forward force of 8400 N.



- (a) Calculate the acceleration of the car, giving your answer correct to three decimal places. [5]
- (b) Determine the tension in the tow bar. [4]

**TURN OVER**

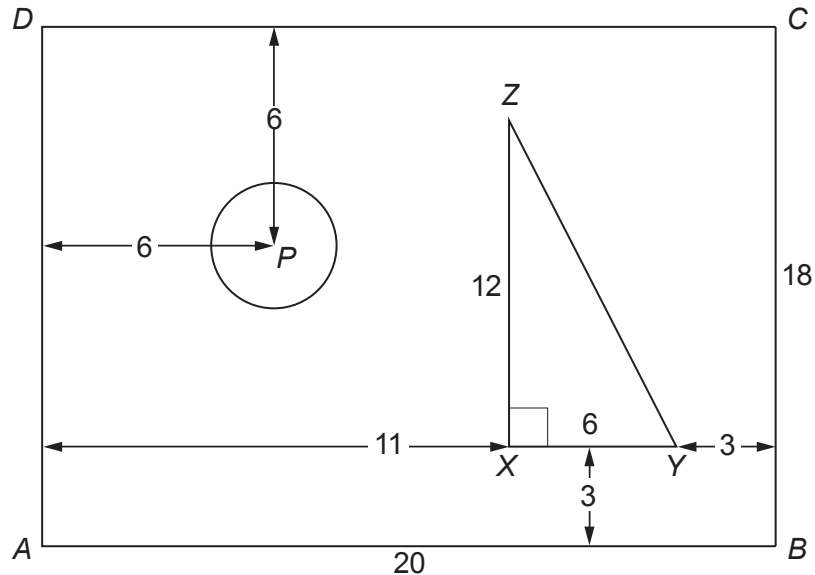
7. A uniform plank  $AB$ , of length  $4.8$  m and mass  $M$  kg, is resting on two smooth supports at points  $X$  and  $Y$ , such that  $AX = BY = 1.2$  m.
- (a) A person of mass  $84$  kg stands on the plank at a point which is  $0.8$  m from  $B$ . The reaction of the support at  $X$  is of magnitude  $156.8$  N.  
Find
- (i) the value of  $M$ ,
  - (ii) the magnitude of the reaction of the support at  $Y$ . [6]
- (b) The person of mass  $84$  kg walks along the plank towards  $A$ . At the instant that the plank starts to tilt about  $X$ , find
- (i) the magnitude of the reaction of the support at  $X$ ,
  - (ii) the distance of the person from  $X$ . [5]
8. An object of mass  $1.8$  kg moving with speed  $3$  ms<sup>-1</sup> on a smooth horizontal surface collides directly with another object of mass  $0.2$  kg, which is stationary. After the collision, the two objects move together.
- (a) (i) Show that the speed of the combined object after the collision is  $2.7$  ms<sup>-1</sup>.  
(ii) Write down the value of the coefficient of restitution between the objects. [4]
- (b) The resistance to motion of the combined object is  $8$  N.
- (i) Find the magnitude of the deceleration of the combined object.
  - (ii) Calculate the speed of the combined object  $0.5$  seconds after the collision.
  - (iii) Determine the distance of the combined object from the point of collision when its speed is  $2$  ms<sup>-1</sup>. [8]

9. The diagram shows a lamina formed by **removing** a circle with centre  $P$  from a rectangle  $ABCD$  made of a uniform material, and **adding** a right-angled triangle  $XYZ$  made of the same uniform material.

The area of the circle is  $21 \text{ cm}^2$ .

The line  $XY$  is parallel to  $AB$  and  $\hat{YXZ} = 90^\circ$ .

Dimensions, in cm, are as shown in the diagram.



- (a) Find the distance of the centre of mass of the lamina from
- $AD$ ,
  - $AB$ .
- [10]
- (b) When the lamina is suspended freely from a point  $Q$  on  $DC$ , it hangs in equilibrium with  $DC$  making an angle of  $45^\circ$  with the vertical. Find the possible distances of  $Q$  from  $D$ .
- [4]

**END OF PAPER**

**BLANK PAGE**

**BLANK PAGE**